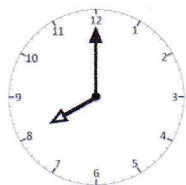


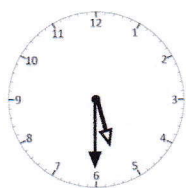
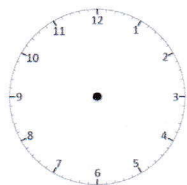
## Practice Sheet Hot

### Fifteen minutes later

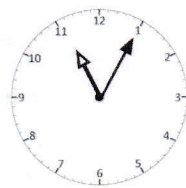
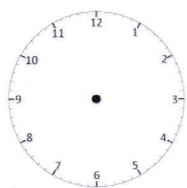
Write the time given under each clock then draw in the time that is 15 minutes later on the next door clock and write that time under the second clock



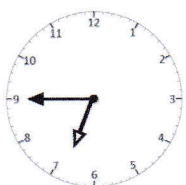
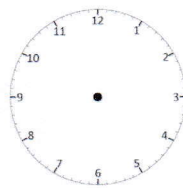
+ 15 mins



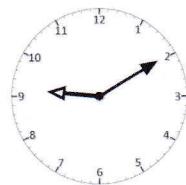
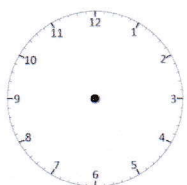
+ 15 mins



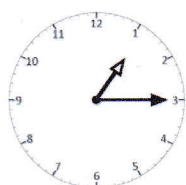
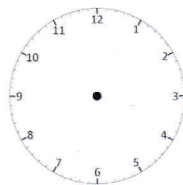
+ 15 mins



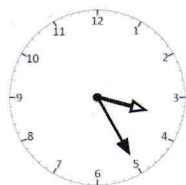
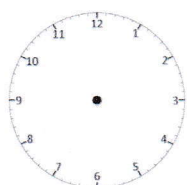
+ 15 mins



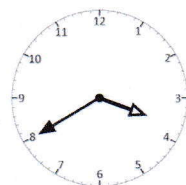
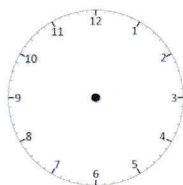
+ 15 mins



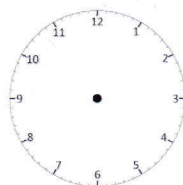
+ 15 mins



+ 15 mins



+ 15 mins



### Challenge

Can you also write the times 30 minutes after the first time?