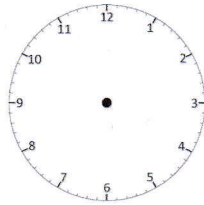


Practice Sheet Mild

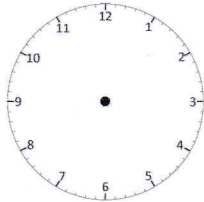
What's the time?

Write the analogue and digital time next to each written time:

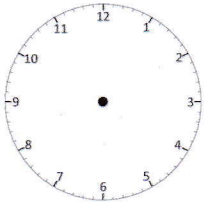
Half past six



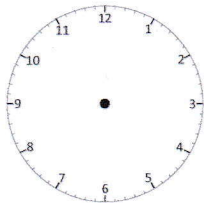
Nine o'clock



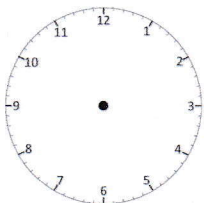
Quarter past twelve



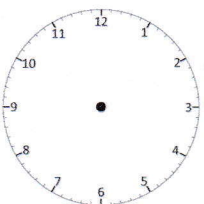
Quarter to three



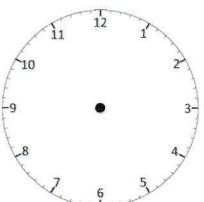
Twenty past seven



Ten past three



Five past seven



Twenty past one

