
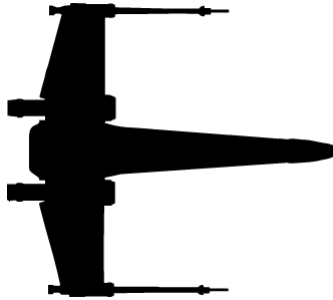


Horizontal, Vertical, Parallel and Perpendicular Lines.

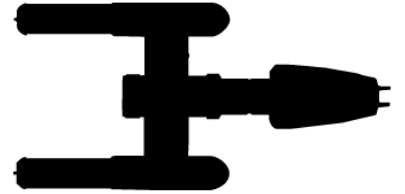
How many horizontal, vertical, parallel or perpendicular lines do these objects from Star Wars have?



Horizontal _____
Vertical _____
Parallel _____
Perpendicular _____



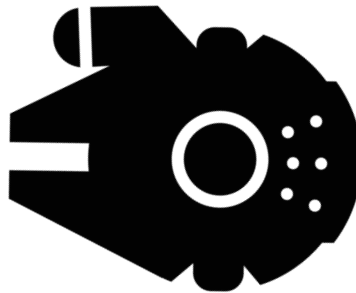
Horizontal _____
Vertical _____
Parallel _____
Perpendicular _____




Horizontal _____
Vertical _____
Parallel _____
Perpendicular _____




Horizontal _____
Vertical _____
Parallel _____
Perpendicular _____




Horizontal _____
Vertical _____
Parallel _____
Perpendicular _____



Horizontal _____
Vertical _____
Parallel _____
Perpendicular _____



Horizontal _____
Vertical _____
Parallel _____
Perpendicular _____



Horizontal _____
Vertical _____
Parallel _____
Perpendicular _____



Horizontal _____
Vertical _____
Parallel _____
Perpendicular _____